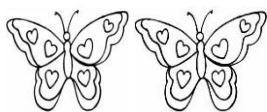


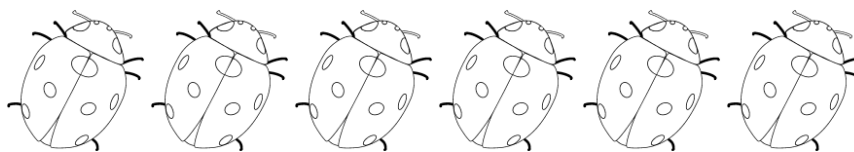
FISA DE LUCRU- DOMENIUL STIINTE

1. Formeaza prin incercuire grupe de obiecte asemenea și scrie in caseta cifra corespunzatoare numarului de obiecte pentru fiecare grupa in parte:




2. Coloreaza atatea elemente cat arata cifra:

5



3



3. Exerseaza cifrele:

1									
2									
3									
4									
5									